

**Physics**  
**Standard level**  
**Paper 3**

Wednesday 1 November 2017 (morning)

Candidate session number

1 hour

--	--	--	--	--	--	--	--	--	--

**Instructions to candidates**

- Write your session number in the boxes above.
- Do not open this examination paper until instructed to do so.
- Answers must be written within the answer boxes provided.
- A calculator is required for this paper.
- A clean copy of the **physics data booklet** is required for this paper.
- The maximum mark for this examination paper is **[35 marks]**.

Section A	Questions
Answer all questions.	1 – 3

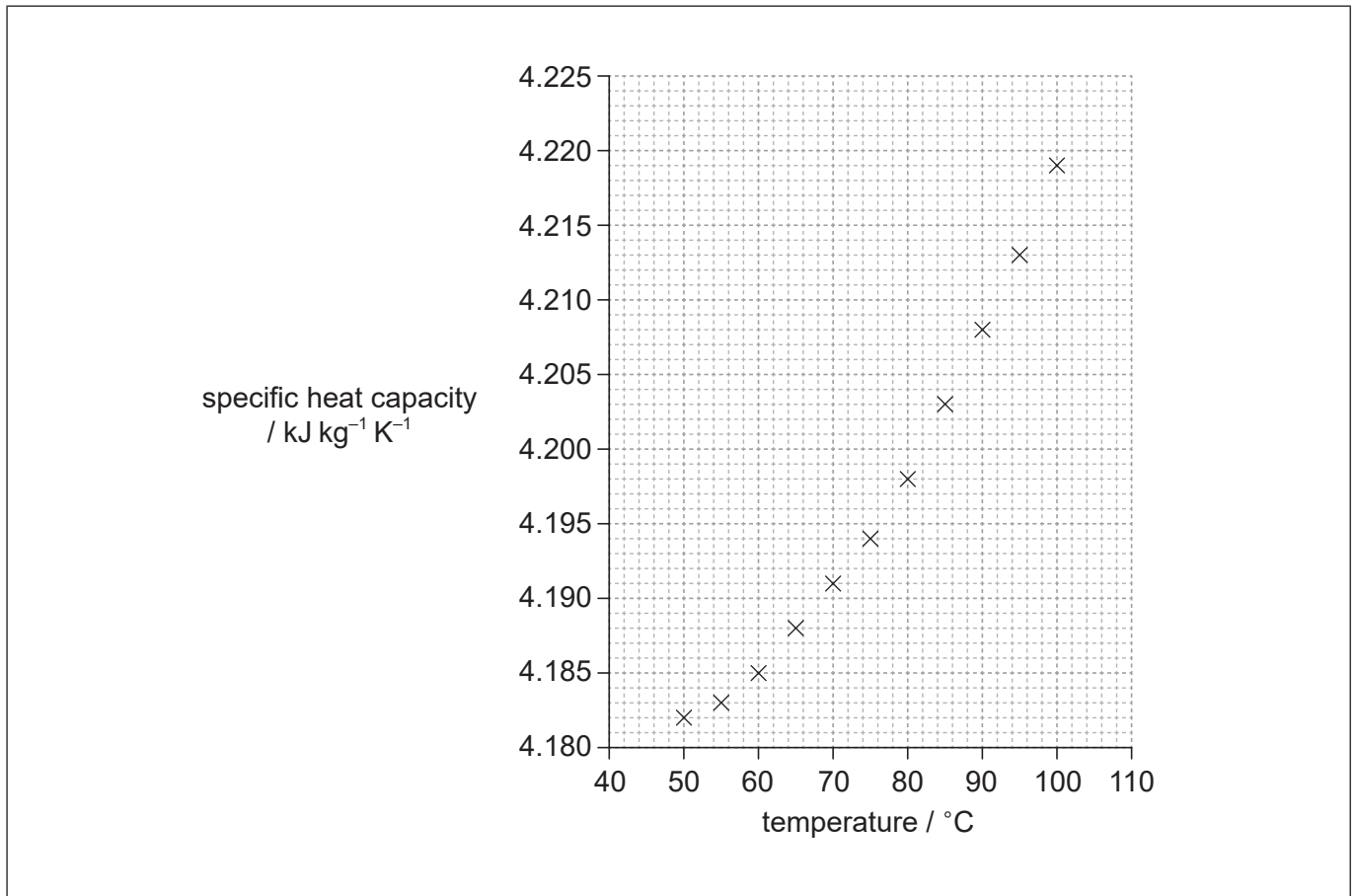
Section B	Questions
Answer all of the questions from one of the options.	
Option A — Relativity	4 – 6
Option B — Engineering physics	7 – 8
Option C — Imaging	9 – 10
Option D — Astrophysics	11 – 13



### Section A

Answer **all** questions. Answers must be written within the answer boxes provided.

1. In an experiment, data were collected on the variation of specific heat capacity of water with temperature. The graph of the plotted data is shown.



- (a) Draw the line of best-fit for the data.

[1]

(This question continues on the following page)



**(Question 1 continued)**

- (b) (i) Determine the gradient of the line at a temperature of 80 °C. [3]

.....  
.....  
.....  
.....  
.....  
.....

- (ii) State the unit for the quantity represented by the gradient in your answer to (b)(i). [1]

.....

- (c) The uncertainty in the values for specific heat capacity is 5%.  
Water of mass  $(100 \pm 2)$  g is heated from  $(75.0 \pm 0.5)$  °C to  $(85.0 \pm 0.5)$  °C.

- (i) Calculate the energy required to raise the temperature of the water from 75 °C to 85 °C. [1]

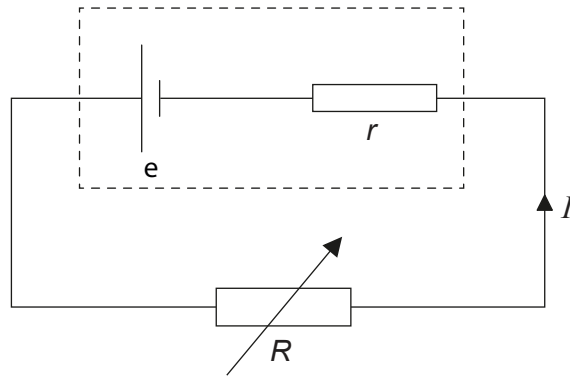
.....  
.....  
.....

- (ii) Using an appropriate error calculation, justify the number of significant figures that should be used for your answer to (c)(i). [3]

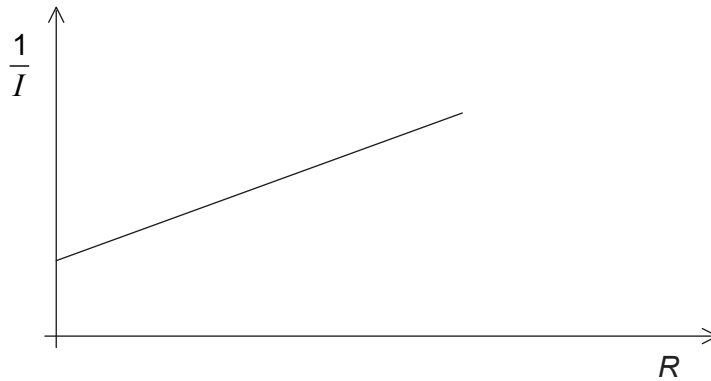
.....  
.....  
.....  
.....  
.....  
.....



2. An electrical circuit is used during an experiment to measure the current  $I$  in a variable resistor of resistance  $R$ . The emf of the cell is  $e$  and the cell has an internal resistance  $r$ .



A graph shows the variation of  $\frac{1}{I}$  with  $R$ .



- (a) Show that the gradient of the graph is equal to  $\frac{1}{e}$ . [2]

.....

.....

.....

.....

- (b) State the value of the intercept on the  $R$  axis. [1]

.....



3. A student is running an experiment to determine the acceleration of free-fall  $g$ . She drops a small metal ball from a given height and measures the time  $t$  taken for it to fall using an electronic timer. She repeats the same experiment several times.

(a) Suggest a reason for repeating the experiment in the same conditions. [1]

.....  
.....  
.....

(b) With the collected data she determines the value of  $g$  to be  $(10.4 \pm 0.7) \text{ m s}^{-2}$ . Researching scientific literature about the location of her experiment she finds the value of  $g$  to be  $(9.807 \pm 0.006) \text{ m s}^{-2}$ . State, with a reason, whether her experiment is accurate. [2]

.....  
.....  
.....  
.....  
.....  
.....



### Section B

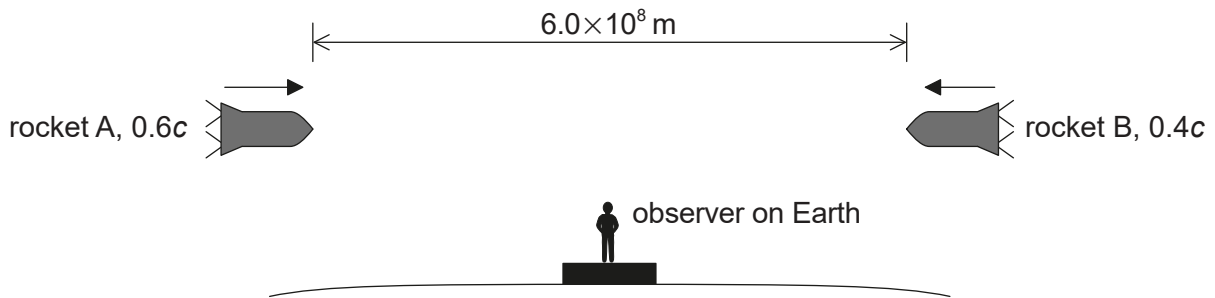
Answer **all** of the questions from **one** of the options. Answers must be written within the answer boxes provided.

#### Option A — Relativity

4. Outline the conclusion from Maxwell’s work on electromagnetism that led to one of the postulates of special relativity. [2]

.....  
.....  
.....  
.....

5. Two rockets, A and B, are moving towards each other on the same path. From the frame of reference of the Earth, an observer measures the speed of A to be  $0.6c$  and the speed of B to be  $0.4c$ . According to the observer on Earth, the distance between A and B is  $6.0 \times 10^8$  m.



- (a) Define frame of reference. [1]

.....  
.....

(Option A continues on the following page)



**(Option A, question 5 continued)**

- (b) Calculate, according to the observer on Earth, the time taken for A and B to meet. [2]

.....  
.....  
.....  
.....

- (c) Identify the terms in the formula. [1]

$$u' = \frac{u - v}{1 - \frac{uv}{c^2}}$$

.....  
.....  
.....  
.....

- (d) Determine, according to an observer in A, the velocity of B. [2]

.....  
.....  
.....  
.....

**(Option A continues on page 9)**



Please **do not** write on this page.

Answers written on this page  
will not be marked.



28EP08



**(Option A, question 5 continued from page 7)**

- (e) (i) Determine, according to an observer in A, the time taken for B to meet A. [2]

.....

.....

.....

.....

- (ii) Deduce, without further calculation, how the time taken for A to meet B, according to an observer in B, compares with the time taken for the same event according to an observer in A. [2]

.....

.....

.....

.....

**(Option A continues on the following page)**




**(Option A continued)**

6. A train is passing through a tunnel of proper length 80 m. The proper length of the train is 100 m. According to an observer at rest relative to the tunnel, when the front of the train coincides with one end of the tunnel, the rear of the train coincides with the other end of the tunnel.

(a) Explain what is meant by proper length. [1]

.....  
.....

(b) Draw a spacetime diagram for this situation according to an observer at rest relative to the tunnel. [3]



(c) Calculate the velocity of the train, according to an observer at rest relative to the tunnel, at which the train fits the tunnel. [2]

.....  
.....  
.....  
.....

**(Option A continues on the following page)**



28EP10

**(Option A, question 6 continued)**

- (d) For an observer on the train, it is the tunnel that is moving and therefore will appear length contracted. This seems to contradict the observation made by the observer at rest to the tunnel, creating a paradox. Explain how this paradox is resolved. You may refer to your spacetime diagram in (b). [2]

.....

.....

.....

.....

.....

.....

**End of Option A**

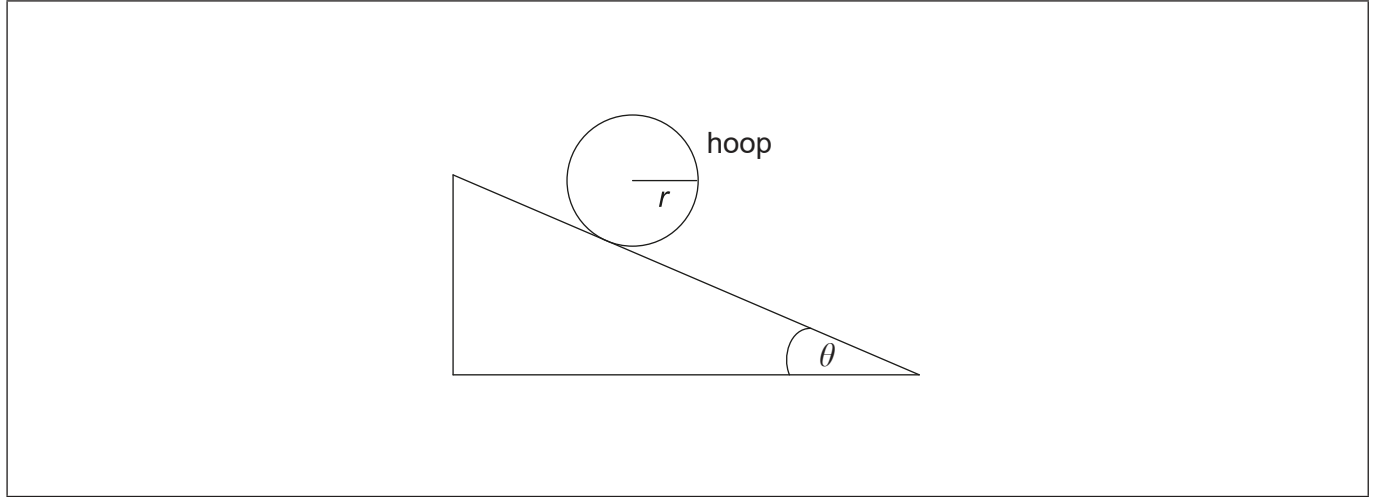


28EP11

**Turn over**

**Option B — Engineering physics**

7. A hoop of mass  $m$ , radius  $r$  and moment of inertia  $mr^2$  rests on a rough plane inclined at an angle  $\theta$  to the horizontal. It is released so that the hoop gains linear and angular acceleration by rolling, without slipping, down the plane.



- (a) On the diagram, draw and label the forces acting on the hoop. [2]
- (b) Show that the linear acceleration  $a$  of the hoop is given by the equation shown. [4]

$$a = \frac{g \times \sin \theta}{2}$$

.....

.....

.....

.....

.....

.....

.....

.....

(Option B continues on the following page)



**(Option B, question 7 continued)**

- (c) Calculate the acceleration of the hoop when  $\theta = 20^\circ$ . Assume that the hoop continues to roll without slipping.

[1]

.....

.....

.....

.....

- (d) State the relationship between the force of friction and the angle of the incline.

[2]

.....

.....

.....

.....

- (e) The angle of the incline is slowly increased from zero. Determine the angle, in terms of the coefficient of friction, at which the hoop will begin to slip.

[3]

.....

.....

.....

.....

.....

.....

**(Option B continues on the following page)**



28EP13

Turn over

**(Option B continued)**

8. A monatomic ideal gas is confined to a cylinder with volume  $2.0 \times 10^{-3} \text{ m}^3$ . The initial pressure of the gas is 100 kPa. The gas undergoes a three-step cycle. First, the gas pressure increases by a factor of five under constant volume. Then, the gas expands adiabatically to its initial pressure. Finally it is compressed at constant pressure to its initial volume.

(a) Show that the volume of the gas at the end of the adiabatic expansion is approximately  $5.3 \times 10^{-3} \text{ m}^3$ . [2]

.....

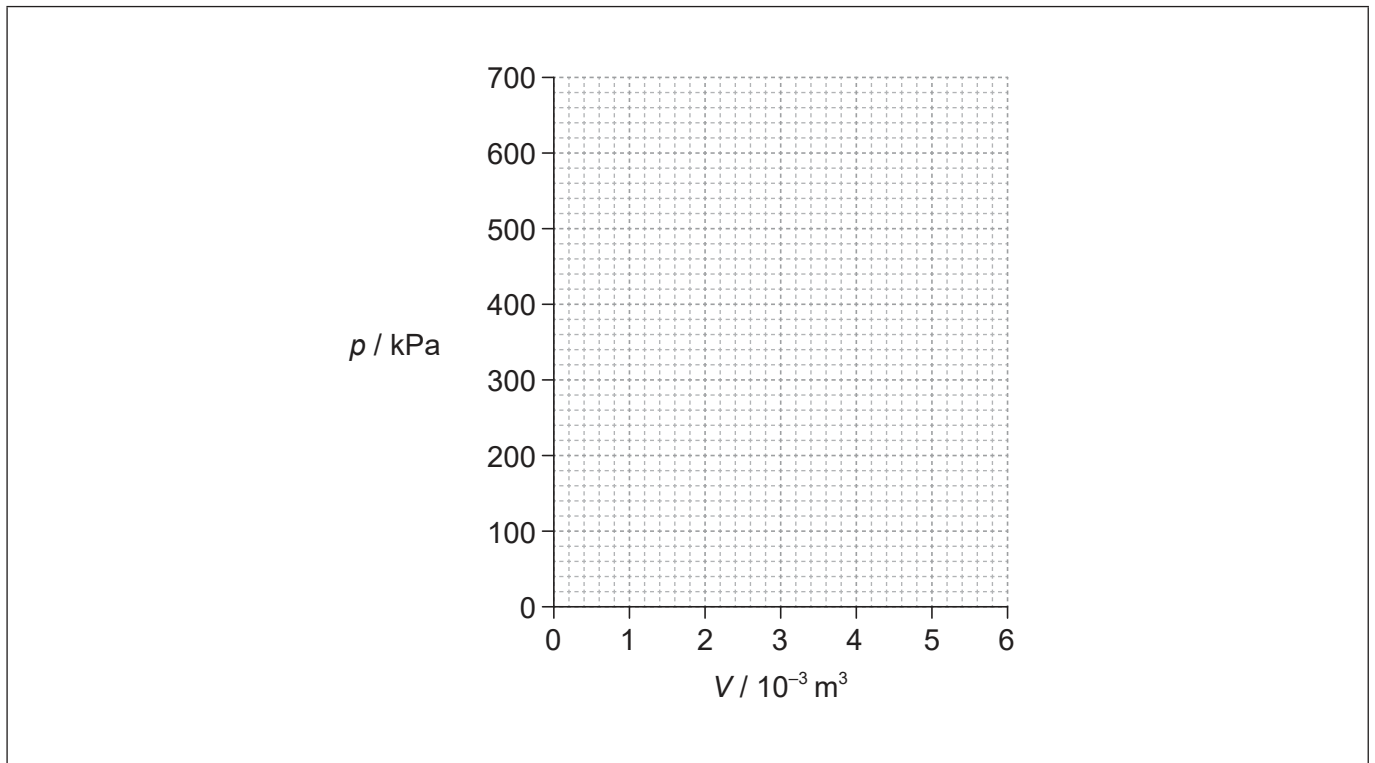
.....

.....

.....

.....

(b) Using the axes, sketch the three-step cycle. [2]



**(Option B continues on the following page)**



28EP14

**(Option B, question 8 continued)**

- (c) The initial temperature of the gas is 290 K. Calculate the temperature of the gas at the start of the adiabatic expansion. [2]

.....

.....

.....

.....

- (d) Using your sketched graph in (b), identify the feature that shows that net work is done by the gas in this three-step cycle. [2]

.....

.....

.....

.....

**End of Option B**



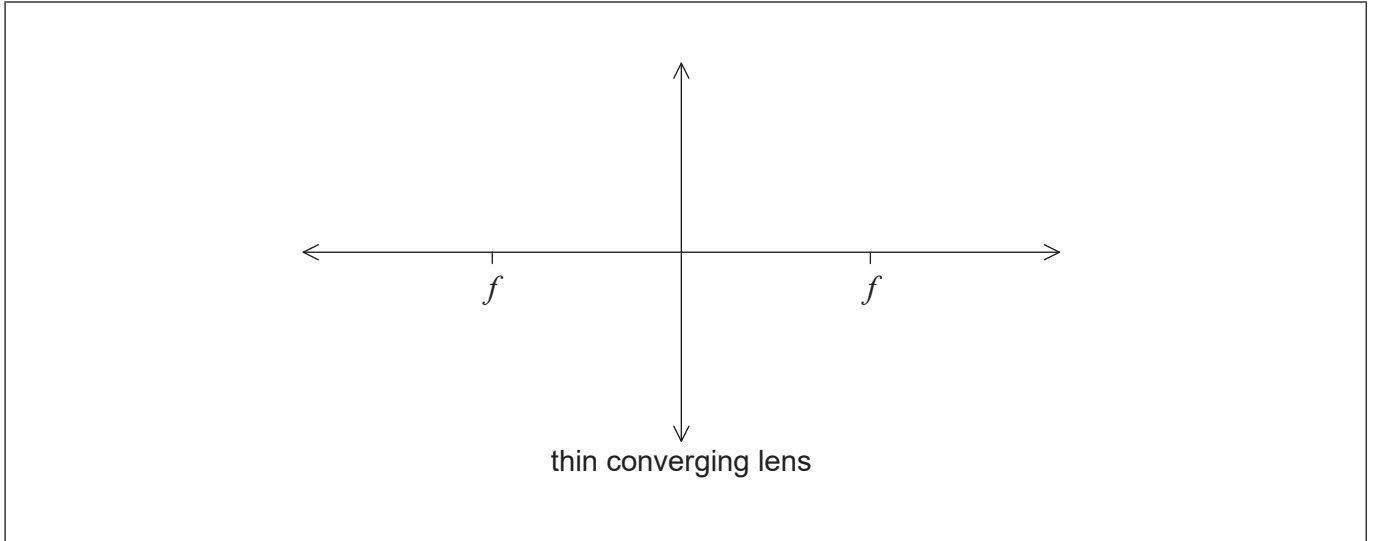
28EP15

Turn over

**Option C — Imaging**

9. A magnifying glass is constructed from a thin converging lens.

- (a) (i) Sketch a ray diagram to show how the magnifying glass produces an upright image. [2]



- (ii) State the maximum possible distance from an object to the lens in order for the lens to produce an upright image. [1]

.....  
.....

(Option C continues on the following page)





**(Option C, question 9 continued)**

(b) A converging lens can also be used to produce an image of a distant object. The base of the object is positioned on the principal axis of the lens at a distance of 10.0 m from the centre of the lens. The lens has a focal length of 2.0 m.

(i) Determine the position of the image. [2]

.....  
.....  
.....  
.....

(ii) State **three** characteristics of the image. [1]

.....  
.....  
.....

**(Option C continues on the following page)**

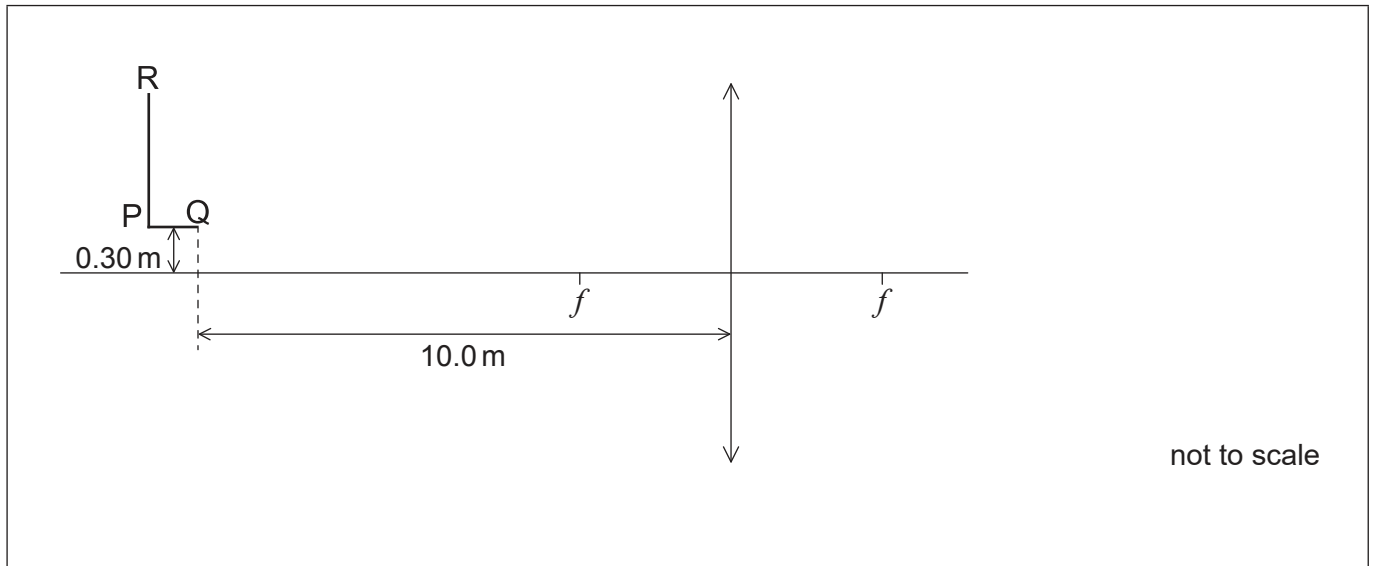


28EP17

Turn over

(Option C, question 9 continued)

- (c) The object is replaced with an L shape that is positioned 0.30 m vertically above the principal axis as shown. A screen is used to form a focused image of part of the L shape. Two points P and Q on the base of the L shape and R on its top, are indicated on the diagram. Point Q is 10.0 m away from the same lens as used in part (b).



- (i) On the diagram, draw **two** rays to locate the point Q' on the image that corresponds to point Q on the L shape. [2]
- (ii) Calculate the vertical distance of point Q' from the principal axis. [2]

.....

.....

.....

.....

- (iii) A screen is positioned to form a focused image of point Q. State the direction, relative to Q, in which the screen needs to be moved to form a focused image of point R. [1]

.....

.....

(Option C continues on the following page)



28EP18

**(Option C, question 9 continued)**

- (iv) The screen is now correctly positioned to form a focused image of point R. However, the top of the L shape looks distorted. Identify and explain the reason for this distortion.

[2]

.....

.....

.....

.....

**(Option C continues on the following page)**



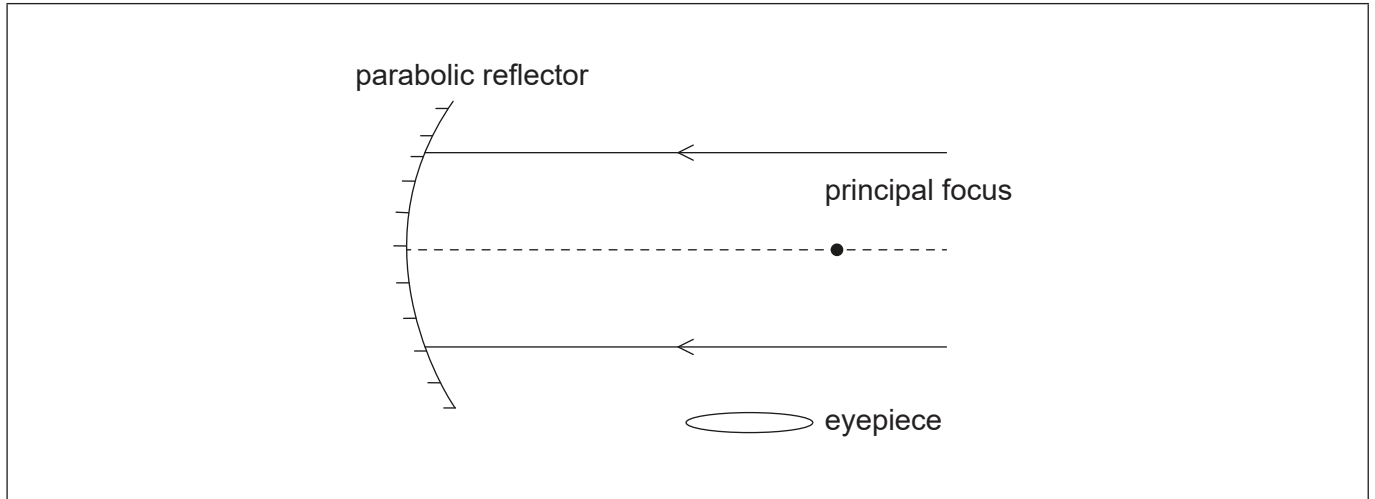
28EP19

Turn over

(Option C continued)

10. An astronomical reflecting telescope is being used to observe the night sky.

The diagram shows an incomplete reflecting telescope.



(a) Complete the diagram, with a Newtonian mounting, continuing the **two** rays to show how they pass through the eyepiece. [3]

(b) When the Earth-Moon distance is 363 300 km, the Moon is observed using the telescope. The mean radius of the Moon is 1737 km. Determine the focal length of the mirror used in this telescope when the diameter of the Moon's image formed by the main mirror is 1.20 cm. [2]

.....

.....

.....

.....

(c) The final image of the Moon is observed through the eyepiece. The focal length of the eyepiece is 5.0 cm. Calculate the magnification of the telescope. [1]

.....

.....

(Option C continues on the following page)



**(Option C, question 10 continued)**

- (d) The Hubble Space reflecting telescope has a Cassegrain mounting. Outline the main optical difference between a Cassegrain mounting and a Newtonian mounting. [1]

.....

.....

**End of Option C**



28EP21

**Turn over**

**Option D — Astrophysics**

11. Two of the brightest objects in the night sky are the planet Jupiter and the star Vega. The light observed from Jupiter has a similar brightness to that received from Vega.

(a) (i) Identify the mechanism leading stars to produce the light they emit. [1]

.....  
.....

(ii) Outline why the light detected from Jupiter and Vega have a similar brightness, according to an observer on Earth. [2]

.....  
.....  
.....  
.....

(Option D continues on the following page)



28EP22

**(Option D, question 11 continued)**

(b) Vega is found in the constellation Lyra. The stellar parallax angle of Vega is about 0.13 arc sec.

(i) Outline what is meant by a constellation. [1]

.....  
.....

(ii) Outline how the stellar parallax angle is measured. [2]

.....  
.....  
.....  
.....

(iii) Show that the distance to Vega from Earth is about 25 ly. [2]

.....  
.....  
.....  
.....

**(Option D continues on the following page)**



28EP23

Turn over

**(Option D continued)**

**12.** Sirius is a binary star. It is composed of two stars, Sirius A and Sirius B. Sirius A is a main sequence star.

(a) State what is meant by a binary star.

[1]

.....  
.....

(b) The peak spectral line of Sirius B has a measured wavelength of 115 nm. Show that the surface temperature of Sirius B is about 25 000 K.

[1]

.....  
.....

(c) The mass of Sirius B is about the same mass as the Sun. The luminosity of Sirius B is 2.5% of the luminosity of the Sun. Show, with a calculation, that Sirius B is **not** a main sequence star.

[2]

.....  
.....  
.....  
.....

**(Option D continues on the following page)**



28EP24



**(Option D, question 12 continued)**

(d) The Sun's surface temperature is about 5800 K.

(i) Determine the radius of Sirius B.

[2]

.....  
.....  
.....  
.....  
.....

(ii) Identify the star type of Sirius B.

[1]

.....

**(Option D continues on the following page)**

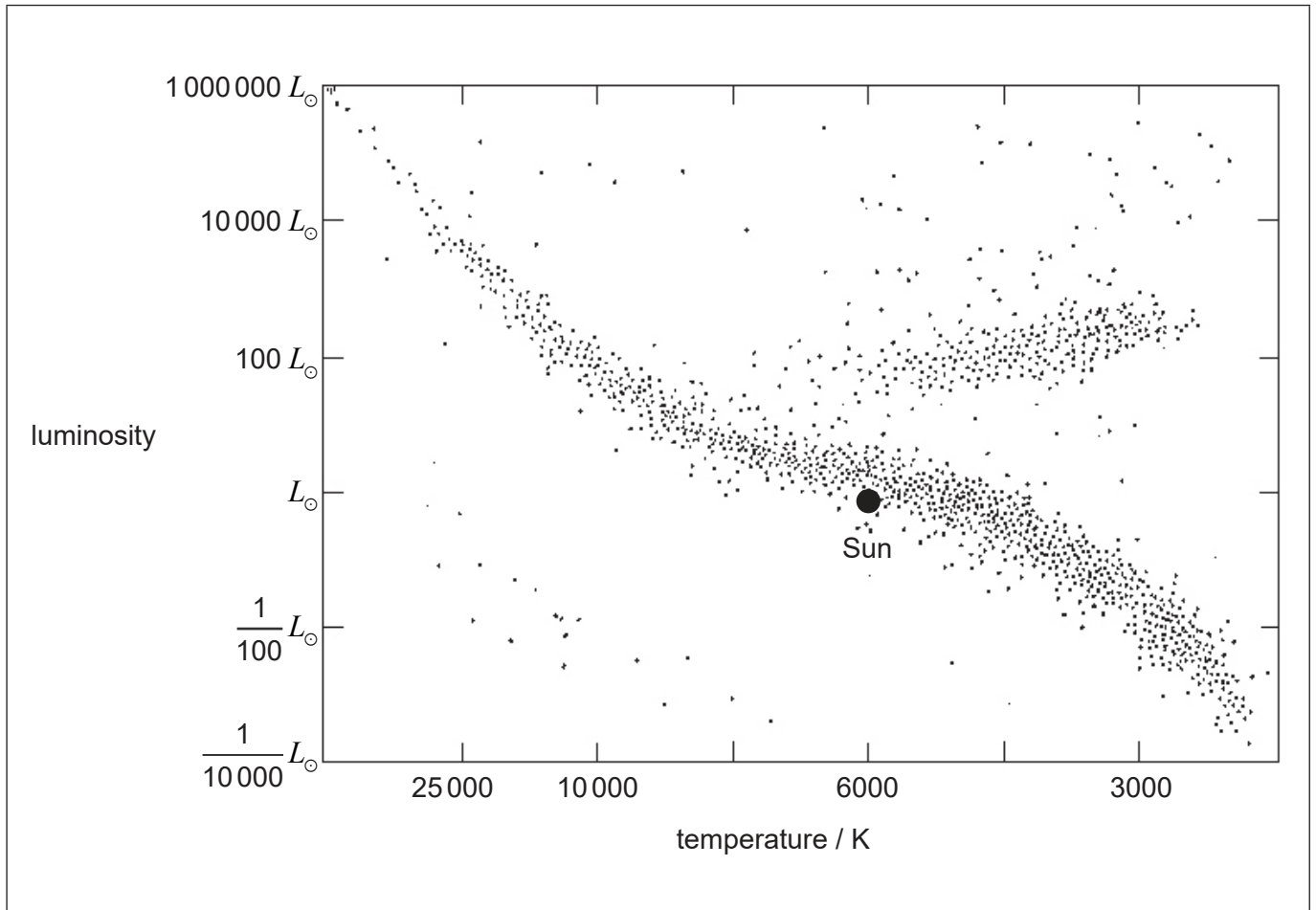


28EP25

Turn over

(Option D, question 12 continued)

(e) The image shows a Hertzsprung–Russell (HR) diagram.



The mass of Sirius A is twice the mass of the Sun. Using the Hertzsprung–Russell (HR) diagram,

- (i) draw the approximate positions of Sirius A, labelled A and Sirius B, labelled B. [1]
- (ii) sketch the expected evolutionary path for Sirius A. [1]

(Option D continues on the following page)



**(Option D continued)**

**13.** The collision of two galaxies is being studied. The wavelength of a particular spectral line from the galaxy measured from Earth is 116.04 nm. The spectral line when measured from a source on Earth is 115.00 nm.

(a) Outline **one** reason for the difference in wavelength. [1]

.....

.....

(b) Determine the velocity of the galaxy relative to Earth. [2]

.....

.....

.....

.....

**End of Option D**

---



28EP27

Please **do not** write on this page.

Answers written on this page  
will not be marked.



28EP28